

SAMPLE PAPER

CLASS: III _____

GENERAL SCIENCE

MM:50

NAME: _____

ROLL NO: _____

Invigilator's sign-

Checker's sign-

Instructions:

- 1. Please read the questions carefully. All questions are compulsory.**
- 2. Adhere to the time limit.**
- 3. Revise the paper before submitting.**

SECTION- A

Q1. Choose the correct option.

(4x1=4)

i) We use our eyes to

- (a) feel (b) taste (c) hear (d) see

ii) The part of the plant that grows into a fruit

- (a) stem (b) flower (c) leaf (d) root

iii) _____ leaves protect clothes from insects.

- (a) mango (b) ashoka (c) coriander (d) neem

iv) _____ are paddle like organs used for swimming by turtles.

- (a) flippers (b) webbed feet (c) gills (d) fins

Q2. Complete the analogy

(3x1=3)





i) Catla : freshwater water fish :: _____ : salty water fish

ii) Mint : garnishing :: _____ : vegetable

iii) Pumpkin : creeper :: _____ : climber

Q3. Match the following

(2)

Column A	Column B
1. Sense of sight	a) 
2. Sense of feel	b) 
3. 	c) angry
4. 	d) lonely

Q4. Rewrite the given statement after correcting the underlined word. (3x1=3)

i) Fishes have webbed feet.

ii) Penguins live in deserts.

iii) Mango leaves are used to add aroma to the food.

Q5. Write True or False

(2x1=2)

i) We can find out the colour of leaf by just touching it. _____

ii) We should poke our eyes with pointed object. _____

Q6. Circle the odd one out.

(2x0.5=1)

- (i) Nose Ears Hands Skin
- (ii) Mango Coconut Peepal Rose

Q7. Fill in the banks

(4x1=4)

- i) _____ is used by fish to breathe in water.
- ii) _____ stores seeds.
- iii) _____ leaf is used as a plate.
- iv) Camels have _____ to walk on sand.

Q8. Give 2 examples each of climber and creeper.

(2)

CLIMBER	CREEPER
1.	1.
2.	2.

SECTION B

Q9. Answer the following questions.

(5x2=10)

i) Write the functions of the roots.

ii) How do Polar Bears protect themselves from cold?


iii) Which types of sound can be differentiated by ears?

iv) How is compost formed?

v) Dolphins are considered intelligent animals. Give a reason.

Q10. Draw and label the diagram of human tongue.

(3)



Q11. How is the stem of watermelon different from the stem of grapes?

(2)

Q12. Choose the correct option.

(1)

Statement 1: The strongest muscle of our body is skin.

Statement 2: Skin enables us to feel smooth and rough surfaces.

- a) Statement 1 is correct but statement 2 is incorrect.
- b) Statement 2 is correct but statement 1 is incorrect.
- c) Both statements 1 and 2 are correct.
- d) Both statements 1 and 2 are incorrect.

Q13. Choose the correct option.

(1)

Statement 1: Zebra has body patterns to protect itself from danger.

Statement 2: Zebra lives in plains.

- a) Statement 1 is correct but statement 2 is incorrect.
- b) Statement 2 is correct but statement 1 is incorrect.
- c) Both statements 1 and 2 are correct.
- d) Both statements 1 and 2 are incorrect.

SECTION C

Q14. Put on your thinking caps.

(3x1=3)

a) Lizards and snakes live in burrows. Why?

b) Name an animal that lives both on land and water.

c) Write any one adaptation of frog.

Q15. (a) Name any 2 articles where you can find leaf designs. (2)



(b). **Identify it as a herb or a shrub (1)**

Q16. Read the following passage and answer the questions that follow.

Sonam's mother is enjoying evening snacks with a hot cup of tea. Sonam is playing near her. She touches the hot cup by mistake and immediately draws her finger away. She says "It is so hot".

(a) Which sense organ does Sonam use to touch the hot cup? (1)

(b) What does Sonam do when she touches a hot cup? (1)

(c) Suggest any two ways to take care of sense organs. (1)

**Q17. Write any 2 differences between the stem of a herb and stem of a shrub.
Also draw the diagrams. (3)**

STEM OF HERB	STEM OF SHRUB
i)	i)
ii)	ii)
iii) Diagram	iii) Diagram